



Reconnaitre, nommer et tracer des triangles	Devoir	
Prénom :	Date :	

1) Trace les triangles demandés.


un triangle rectangle  
scalène



un triangle rectangle  
isocèle



un triangle acutangle  
isocèle

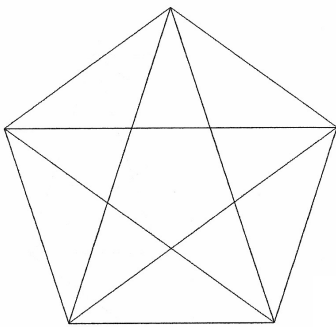


2)

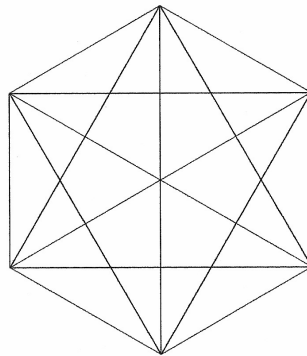
— Colorie pour faire apparaître :

3) Finis de tracer les triangles demandés.

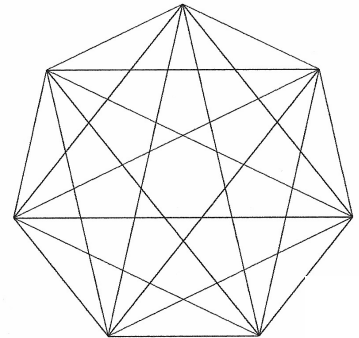
un triangle acutangle  
isocèle

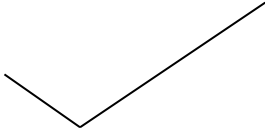
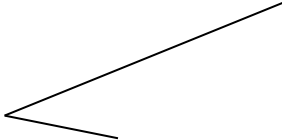

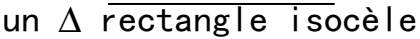


un triangle rectangle  
scalène



un triangle obtusangle  
scalène



 un $\Delta$ obtusangle isocèle	 un $\Delta$ acutangle isocèle
 un $\Delta$ obtusangle scalène	 un $\Delta$ rectangle isocèle

4) Il ne doit plus y avoir que des triangles ! A toi de tracer.

